



# St. Andrews Scots School

Adjacent Navniti Apartments , I.P Extension,Patparganj,Delhi-110092

Session – 2024- 2025

Winter Holiday Homework

Class 2



*Enjoy yourself to the  
fullest during this  
winter break and have  
lots of fun*

*Winter Holiday homework*



- 1. Do reading and writing regularly**
- 2. Take the print out of all the worksheets and do the work in worksheets .**
- 3. Compile the worksheets in one folder .  
Mention your name , class and section on it.**
- 4. Learn tables 6 to 13**



# Prepositions

Fill in the blanks with the prepositions given in the box :

in, on, under, over, behind,  
beside, between, in front of

1. The cat is \_\_\_\_\_ the bench.



2. The ball is \_\_\_\_\_ the bat.



3. The boy is \_\_\_\_\_ the car.



4. The books are \_\_\_\_\_ the box.



5. The shoes are \_\_\_\_\_ the table.



6. The girl is \_\_\_\_\_ the book.



7. My dog jumped \_\_\_\_\_ the box.



8. The ball is \_\_\_\_\_ the boxes.



# Prepositions

---

Choose the correct preposition:

1. The fruits are ( **in** / **on** ) the basket.
2. The cat is hiding ( **under** / **to** ) my bed.
3. Some birds are flying ( **over** / **for** ) the house.
4. The tree is ( **behind** / **in** ) the house.
5. The dog is standing ( **in** / **between** ) the two chairs.
6. My sister lives ( **in** / **on** ) Korea.
7. My classroom is ( **on** / **at** ) the ground floor.
8. Please don't walk ( **in front of** / **to** ) me.
9. The bear is ( **beside** / **in** ) the sofa.
10. The cat was sleeping ( **in** / **under** ) the table.

## विषय - हिंदी

अनेक शब्दों के लिए एक शब्द

1. गाना गाने वाला -
2. आभूषण बनाने वाला -
3. कपड़े धोने वाला -
4. रोगी का इलाज करने वाला -
5. मिट्टी के बर्तन बनाने वाला -
6. मांस खाने वाला -
7. जूते बनाने वाला -
8. चित्र बनाने वाला -
9. जिसमें दया ना हो -
10. सप्ताह में एक बार होने वाला -

चित्र में रंग भरो और पाँच पंक्तियाँ लिखें



---

---

---

---

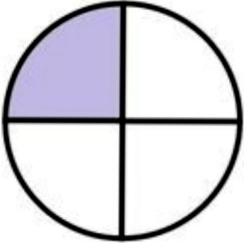
---

## SUBJECT- MATHS

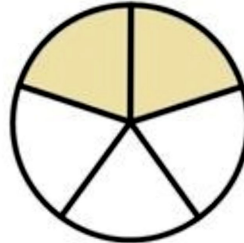
### Q. Fill in the blanks

1. \_\_\_\_\_ is the official currency of Japan.
2. A leap year has \_\_\_\_\_ days.
3. Opposite sides of the rectangle are \_\_\_\_\_.
4. There are two types of clock namely, \_\_\_\_\_ and \_\_\_\_\_.
5. Christmas comes in the month of \_\_\_\_\_.
6. The symbol for rupee is \_\_\_\_\_ and paise is \_\_\_\_\_.
7. A triangle has \_\_\_\_\_ sides and \_\_\_\_\_ vertices.
8. Pound is the currency of \_\_\_\_\_.
9. \_\_\_\_\_ comes before Wednesday.
10. Half past 5 is equal to \_\_\_\_\_.

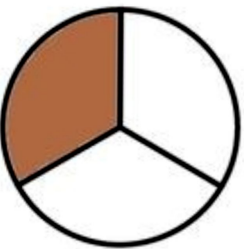
Write fraction of the shaded part.



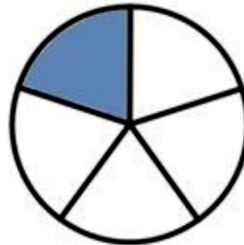
$$\frac{1}{4}$$



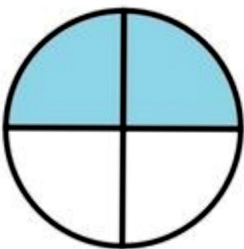
—




—



—



—



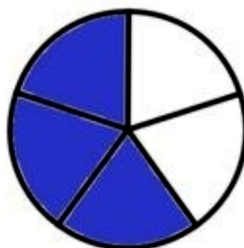
—



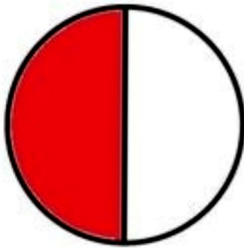
—



—



—



—



## **Subject :EVS**

**Give two examples of each**

**1. Water transport**

\_\_\_\_\_ , \_\_\_\_\_

**2. Land transport**

\_\_\_\_\_ , \_\_\_\_\_

**3. Air transport**

\_\_\_\_\_ , \_\_\_\_\_

**4. Slow moving vehicles**

\_\_\_\_\_ , \_\_\_\_\_

**5. Fastest means of transport**

\_\_\_\_\_ , \_\_\_\_\_

**6. Animals used in hilly areas**

\_\_\_\_\_ , \_\_\_\_\_

Subject - Computer

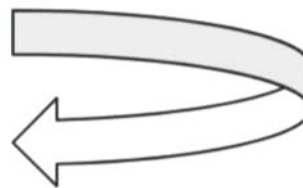
Q1 Give one word answer.

a) It is a shape with three sides. \_\_\_\_\_

b) To save a document. \_\_\_\_\_

Q2 Match the following.

a) Text tool



b) Line tool.

**A**

c) Curve



Q3 Rearrange the letters to get the correct words.

a) ORWD. \_\_\_\_\_

b) BALNK ODUCEMENT \_\_\_\_\_

# ART

**Complete all the pages of Fusion and Fission Art and Craft book**

Happy  
New Year